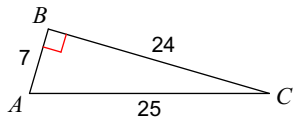


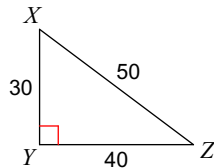
Assignment

Find the value of each trigonometric ratio.

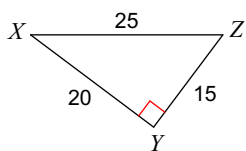
1) $\cos C$



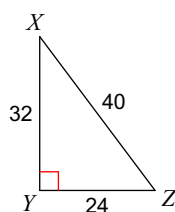
2) $\tan Z$



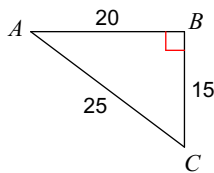
3) $\cos X$



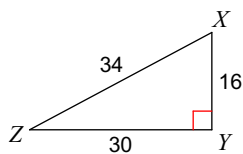
4) $\cos Z$



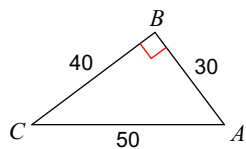
5) $\sin C$



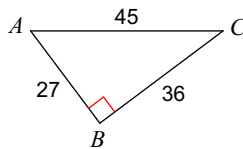
6) $\cos X$



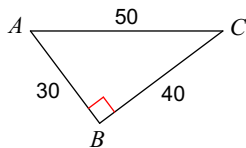
7) $\sin C$



8) $\sin A$



9) $\sin A$



10) $\sin Z$

