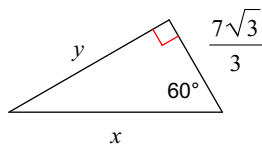


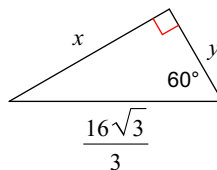
# Special Right Triangles

**Find the missing side lengths. Leave your answers as radicals in simplest form.**

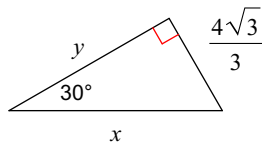
1)



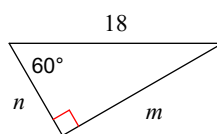
2)



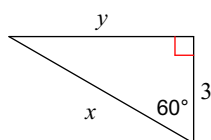
3)



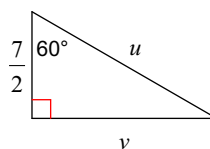
4)



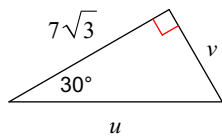
5)



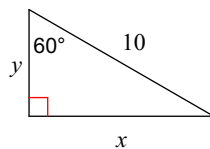
6)



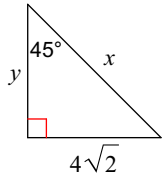
7)



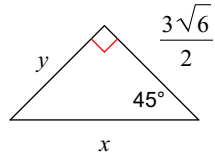
8)



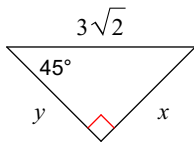
9)



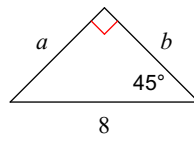
10)



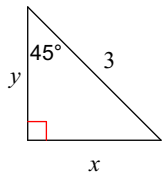
11)



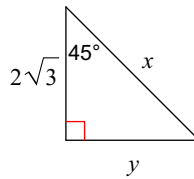
12)



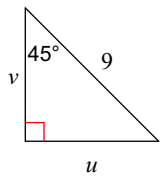
13)



14)



15)



16)

